



SEEMAX[®] International School
vision upto max[™] limit (Umbrella Organisation-Om Sarla Babu Educational Trust)

SUMMER HOLIDAY HOMEWORK

2023-24

Class- II



NAME _____



DEAR PARENTS,
GREEN GREETINGS!

“DESPITE THE HOT SUN, WE CAN STILL HAVE A

LOT OF FUN, SO VACATION IS HERE

FOR A SWEET RETREAT”. SUMMER HOLIDAYS

ARE ROUND THE CORNER AND HERE WE ARE

WITH SOME FRUITFUL ACTIVITIES DESIGNED

AT SEEMAX INTERNATIONAL SCHOOL TO ENHANCE

CHILDREN’S CREATIVITY

AND INNOVATION FOR PROGRESSIVE

LEARNING.

HYGIENE:-

****Brush your teeth twice a day.***

****Do trims your nails often.***

****Do not waste water and electricity.***

****Keep your surrounding and environment clean. It is a bad habit to throw things out of the window, car or a balcony.***

****Make friends having good habits who respect their elders and use good language.***

Class II

SUBJECT :

ENGLISH



Write five sentences about your favourite season.

1. _____.

2. _____.

3. _____.

4. _____.

5. _____.

Write the plural form of the given nouns:-

Singular

Plural

Book

Shop

Bush

Dish

Cherry

Fox

Box


Peach

Shelf

fruit word search

1. Write the name of the fruit in the space provided.
2. Find the word in the word search puzzle.
(Words only run across and down.)

s	t	r	a	w	b	e	r	r	y
o	r	a	n	j	e	p	e	a	r
r	m	e	h	o	a	e	w	n	a
a	b	a	b	a	n	a	n	a	p
n	x	p	a	i	r	c	e	y	p
g	r	a	p	e	s	h	k	a	l
e	p	i	n	e	a	p	p	l	e



Class II
SUBJECT :
HINDI

प्रश्न १ - चित्र देख कर तीन - तीन पर्यायवाची शब्द लिखो-













प्रश्न २ मिलान करो भाषा के रूप

मौखिक भाषा

लिखित भाषा



1. निम्नलिखित में से किस वाक्य के सबसे अधिक शब्दों में 'अनुस्वार' का प्रयोग हुआ है?

1. हिंदी वर्णमाला में संयुक्त व्यंजनों की संख्या चार है।
2. मुझे ये सभी व्यंजन पसंद हैं।
3. संयुक्त व्यंजन दो व्यंजनों को जोड़कर बनते हैं।
4. इस वाक्य में रेखांकित और रंगीन शब्दों के अर्थ बताइए।

2. मुख से निकली ध्वनियाँ ही _____ बनती हैं।' इस वाक्य में रिक्तस्थान की पूर्ति निम्नलिखित में से किन शब्दों से की जाएगी?

1. शब्द
2. भाषा
3. अनुनासिक
4. अनुस्वार

3. जिस ध्वनि के टुकड़े न हो सकें, उसे _____ कहते हैं।' इस वाक्य में रिक्तस्थान की पूर्ति निम्नलिखित में से किन शब्दों से की जाएगी?

1. वर्ण अथवा शब्द
2. शब्द अथवा अक्षर
3. वर्ण अथवा अक्षर
4. स्वर

4. 'कल्पना' शब्द की रचना निम्नलिखित में से किन ध्वनियों के प्रयोग से हुई है?

1. क् + अ + ल + प् + अ + न् + आ
2. क् + अ + ल् + प् + अ + न् + आ
3. क् + अ + ल् + प + अ + न् + आ
4. क् + अ + ल् + प् + अ + न + आ

5. 'भारत' शब्द की रचना निम्नलिखित में से किन ध्वनियों के प्रयोग से हुई है? सही विकल्प का चुनाव कीजिए।

1. भ् + आ + र् + अ + त् + अ
2. भ + आ + र् + अ + त् + अ
3. भ् + आ + र + अ + त् + अ
4. भ् + आ + र् + अ + त + अ

रचनातनामक कार्य

एक रंगीन चार्ट पर हिंदी में महीनो और दिनों के नाम लिखे
उसमे अपने घर वालो का जन्मदिन भी लिखे



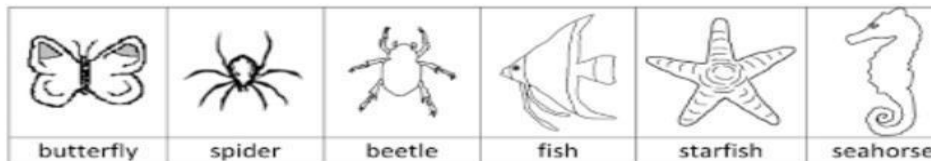
Class II
SUBJECT : MATHS

Q1. Fill in the blanks with <, > or =.

- a) 116 ____ 142
- b) 233 ____ 147
- c) 203 ____ 349
- d) 382 ____ 209
- e) 232 ____ 109
- f) 159 ____ 240
- g) 304 ____ 110

Q2. Ordinal Numbers. Write the answer and colour them:-

ORDINAL NUMBERS – FIND AND COLOR 5



If the butterfly is the first animal...

- 1) Which animal is fourth? _____
- 2) What place is the starfish in? _____
- 3) What place is the spider in? _____
- 4) Which animal is 3rd? _____
- 5) Which animal is last? _____
- 6) Color the second animal red.
- 7) Color the fourth animal orange.
- 8) Color the first animal yellow.
- 9) Color the 5th animal blue.
- 10) Color the third animal black.
- 11) Color the 6th animal green.

Q3. Write the place value of the underlined digit of the given numbers:-

<u>1</u> 54	<u>5</u> 0	44 <u>7</u>	<u>7</u>	<u>8</u> 43	<u>8</u> 00
3 <u>4</u> 5	_____	<u>8</u> 94	_____	3 <u>3</u> 4	_____
6 <u>7</u> 4	_____	<u>2</u> 53	_____	4 <u>4</u> 6	_____
4 <u>5</u> 1	_____	<u>3</u> 76	_____	<u>6</u> 25	_____
8 <u>5</u> 5	_____	54 <u>2</u>	_____	<u>1</u> 68	_____
<u>3</u> 69	_____	1 <u>6</u> 4	_____	73 <u>8</u>	_____
<u>4</u> 09	_____	38 <u>9</u>	_____	7 <u>9</u> 9	_____
7 <u>0</u> 7	_____	<u>3</u> 28	_____	8 <u>4</u> 8	_____

Q4. BRAIN TEASER

110	809	436	999	429	545	677	500
390	981	541	234	123	632	549	899

Find the numbers from the grid given above:-

- (i) A number in which all the digits are same.
- (ii) A number that has 6 in the hundred's place.
- (iii) A number in which the digit in hundreds house and ones house is same.
- (iv) A number that comes between 109 and 111.

Class II

SUBJECT : EVS

Worksheet 1

My Body

Rearrange the letters to find the name of the body parts

A rea.....

E gel.....

B ahnd.....

F yees.....

C oens.....

G daeh.....

D infegsr.....

H cnek.....

Fill in the blanks

Smell, taste, see, hear, feel

1. I can different shapes.
2. I cansweets.
3. I can hot milk.
4. I can sweet fragrance of flowers.
5. I cansoft music.

Some parts in our body are in pairs. Write their names and draw their pictures.

.....

.....

.....

Worksheet -2

FAMILY

Q 1 Fill in the blanks

1. We shouldour elders.
2. A..... family has one set of parents.
3. We should help each other by... the work.
4. A family has common
5. My sister isof my parents.
6. My mother`s family is my family.
7. My father`s brother is my
8. In a family ever member shares the work.

Q 2. Paste the picture of your mother and write 5 lines about your mother

.....

.....

.....

.....

.....

Q 1. What do you call these relatives:

1. Your mother`s mother.....
2. Your mother`s father.....
3. Your father`s mother.....
4. Your father`s father.....
5. Your mother`s sister.....
6. Your father`s sister.....

Activity 1

Make a 2D or 3D family tree using all possible waste material in the house cardboards, old plastic glass/plate used gift wraps etc. and paste/draw all the family members picture in it including grandparents, parents, uncle, aunts and cousins.


Link for the activity -

<https://www.youtube.com/watch?v=xgX7Erb>

[BShU](#)



Note: Make a Video Call to your family members and tell them how much you love and miss them.



<https://www.youtube.com/watch?v=SUt8q0EKbms>

Body Parts

<https://www.youtube.com/watch?v=9nTUZNz49aU>

Sense Organs

<https://www.youtube.com/watch?v=KsQoFK8G4pQ>

Internal and External Organs

https://www.youtube.com/watch?v=QG4U3xh_PIO

Animal World

Class II
SUBJECT : COMPUTERS

Children, we learn about uses of computer. Here are some questions based on the various uses of computer. Answer the following questions.

Q1. Choose the correct answer: -

1. Which of the following is true about computer?
 - (i) Computer can run
 - (ii) Computer can sing
 - (iii) Computer can eat
 - (iv) We can type on a computer
2. The full form of PC is
 - (i) Process Computer (ii) Private Computer (iii) Personal Computer (iv) Perfect Computer

Q2. Write True and False: -

1. A desktop computer needs a battery ()
2. A computer can be used to design clothes ()
3. A computer can take its own decision ()
4. Computers are used in banks to keep records
of the customers and their accounts ()


Q3. Answer in one word or a sentence:-

- A. Computer can store a large amount of
- B. A computer can be used to book
- C. We can use a computer to draw
- D. are smaller than desktop computers but larger than tablets.

Q4. Look at the pictures and write what are they doing on a computer?



A.



B.



C.

Q5. Write two uses of computer at school.

.....
.....
.....
.....

Q6. Write two places where you have seen a computer.

.....
.....